

Inverse Trig / Trig / Graphs

Review:

$$\sin(A+B) = \sin A \cos B + \cos A \sin B$$

$$\sin(90^\circ) = \sin\left(\frac{\pi}{2}\right) = 1$$

ex: $\sin(90^\circ) = \sin(60^\circ + 30^\circ) = \sin 60^\circ \cos 30^\circ + \cos 60^\circ \sin 30^\circ$
 $= \left(\frac{\sqrt{3}}{2}\right)\left(\frac{\sqrt{3}}{2}\right) + \left(\frac{1}{2}\right)\left(\frac{1}{2}\right)$
 $\sin 90^\circ = \frac{3}{4} + \frac{1}{4} = \frac{4}{4} = 1 \checkmark$

ex: $\sin(15^\circ) = \sin(45^\circ - 30^\circ) = \sin 45^\circ \cos 30^\circ - \cos 45^\circ \sin 30^\circ$
 difference of two angles
 $= \left(\frac{\sqrt{2}}{2}\right)\left(\frac{\sqrt{3}}{2}\right) - \left(\frac{\sqrt{2}}{2}\right)\left(\frac{1}{2}\right)$

$$\sin(15^\circ) = \frac{\sqrt{6}}{4} - \frac{\sqrt{2}}{4} = \frac{\sqrt{6} - \sqrt{2}}{4}$$

ex: half angle

$$\sin\left(\frac{30^\circ}{2}\right) = +\sqrt{\frac{1 - \cos(30^\circ)}{2}}$$

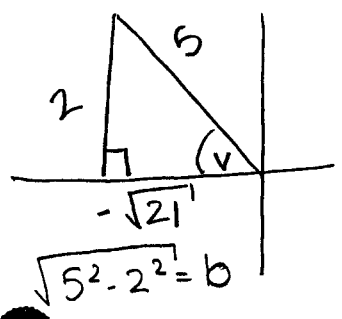
$$= \sqrt{\frac{1 - \frac{\sqrt{3}}{2}}{2}}$$

$$= \sqrt{\frac{2 - \sqrt{3}}{4}}$$

$$* \sin\left(\frac{A}{2}\right) = \pm \sqrt{\frac{1 - \cos A}{2}}$$

ex: $\sin V = \frac{2}{5}$ opp over hyp

$\frac{\pi}{2} \leq V \leq \pi$ Find $\sin 2V$, $\cos 2V$, $\tan 2V$
 V is in Quad II



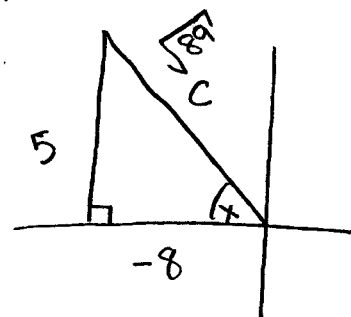
$$\textcircled{1} \sin(2V) = 2 \sin V \cos V = 2 \left(\frac{2}{5}\right) \left(-\frac{\sqrt{21}}{5}\right) = \frac{-4\sqrt{21}}{25}$$

$$\textcircled{2} \cos(2V) = \left(-\frac{\sqrt{21}}{5}\right)^2 - \left(\frac{2}{5}\right)^2 = \frac{21}{25} - \frac{4}{25} = \frac{17}{25}$$

$$\textcircled{3} \tan(2V) = \frac{\sin(2V)}{\cos(2V)} = \frac{-4\sqrt{21}}{25} \cdot \frac{25}{17} = \frac{-4\sqrt{21}}{17}$$

ex: If $\tan x = -\frac{5}{8}$, $\frac{\pi}{2} \leq x \leq \pi$

Find $\sin \frac{x}{2}$, $\cos \frac{x}{2}$



$$c^2 = 5^2 + (-8)^2$$

$$c = \sqrt{89}$$

$$\sin\left(\frac{x}{2}\right) = \sqrt{\frac{1 - \cos x}{2}} = \sqrt{\frac{1 - \left(-\frac{8}{\sqrt{89}}\right)}{2}}$$

$$\sin \frac{x}{2} = \sqrt{\frac{1 + \frac{8}{\sqrt{89}}}{2}}$$

$$\cos \frac{x}{2} = \sqrt{\frac{1 + \cos x}{2}} = \sqrt{\frac{1 + \left(-\frac{8}{\sqrt{89}}\right)}{2}}$$

$$\cos \frac{x}{2} = \sqrt{\frac{1 - \frac{8}{\sqrt{89}}}{2}}$$

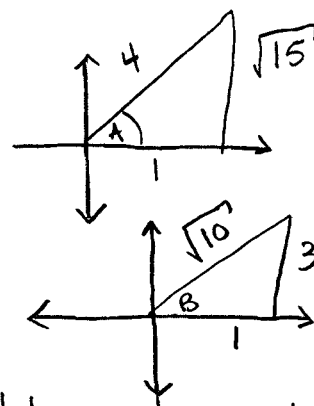
ex: $\cos(\cos^{-1} \frac{1}{4} + \tan^{-1} 3) = ?$

$$\cos(A+B) = \cos A \cos B - \sin A \sin B$$

$$A = \cos^{-1} \frac{1}{4} \quad B = \tan^{-1} 3$$

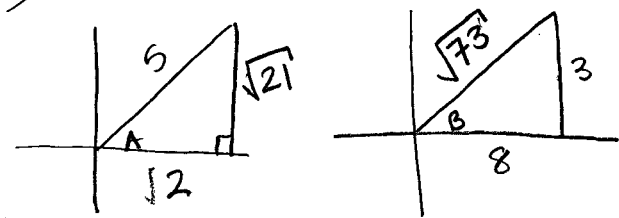
$$\cos(\cos^{-1} \frac{1}{4} + \tan^{-1} 3) = \left(\frac{1}{4}\right)\left(\frac{1}{\sqrt{10}}\right) - \left(\frac{\sqrt{15}}{4}\right)\left(\frac{3}{\sqrt{10}}\right)$$

$$= \frac{1 - 3\sqrt{15}}{4\sqrt{10}}$$



* $\cos^{-1} \frac{1}{4}$ and $\tan^{-1} 3$
let us draw triangles to use!

ex: $\sin(\cos^{-1}(\frac{2}{5}) + \tan^{-1}(\frac{3}{8})) = ?$

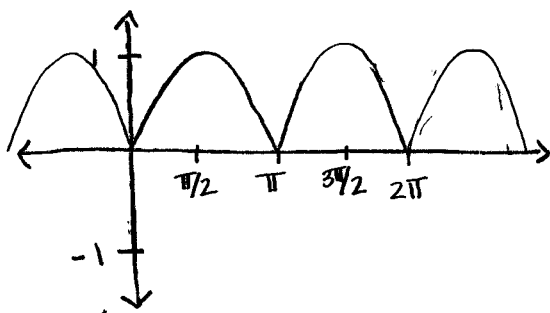


$$= \sin A \cos B + \cos A \sin B$$

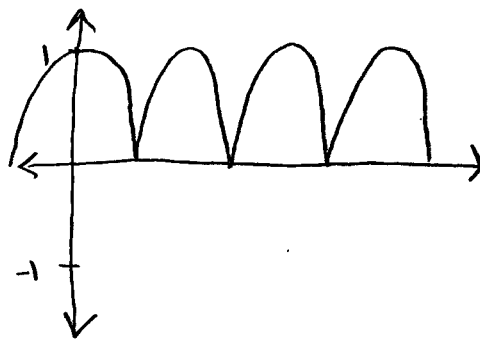
$$= \left(\frac{\sqrt{21}}{5}\right)\left(\frac{8}{\sqrt{73}}\right) + \left(\frac{2}{5}\right)\left(\frac{3}{\sqrt{73}}\right)$$

$$= \frac{8\sqrt{21} + 6}{5\sqrt{73}}$$

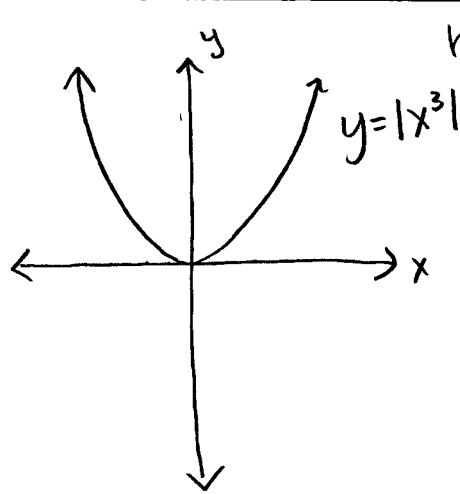
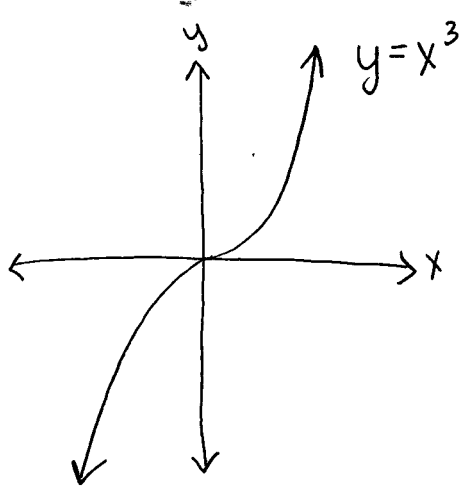
$$y = |\sin x|$$



$$y = |\cos x|$$



the absolute value takes any negative values and reflects them over the x-axis!
No negative values!



helpful graphs to know:

$f(x) = x^2$

$f(x) = \sin x$

$f(x) = x^3$

$f(x) = \cos x$

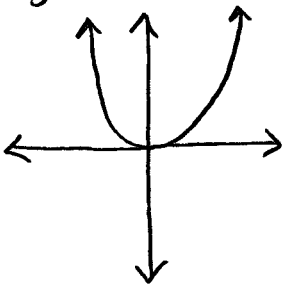
$f(x) = e^x$

$f(x) = 1/x$

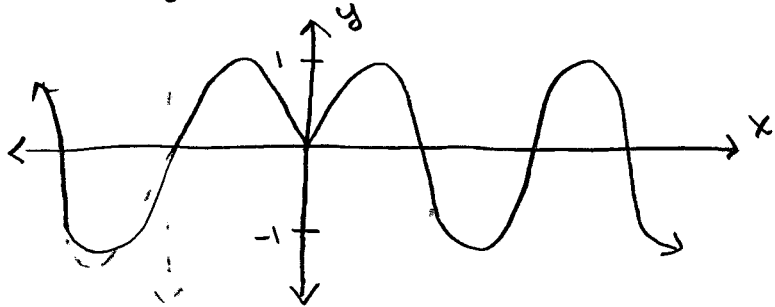
$f(x) = \ln x$

$f(x) = x$

$y = x^2 = |x^2|$

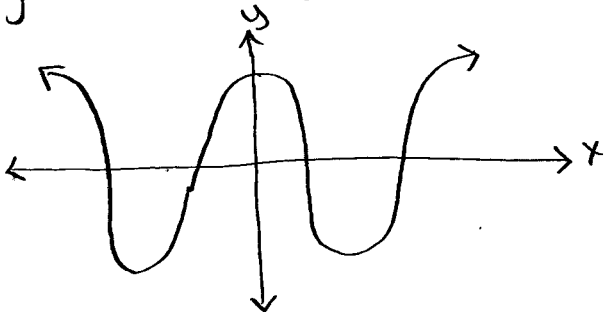


$y = \sin|x|$

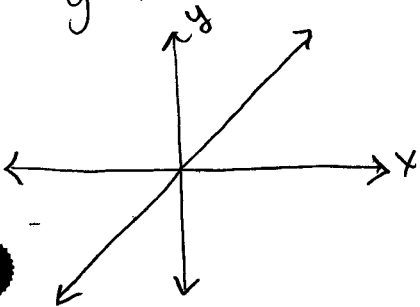


* when you take the absolute value of the input you reflect the right side of the x-axis over the y-axis (mirror).

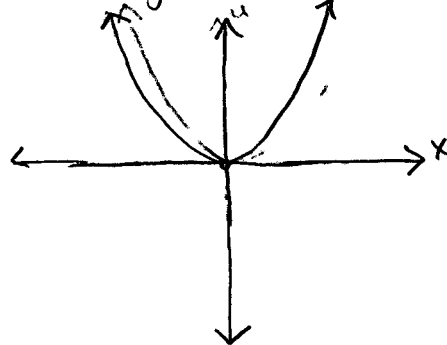
$y = \cos|x| = y = \cos x$



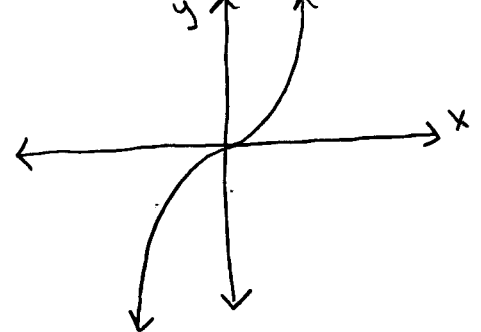
$y = x$



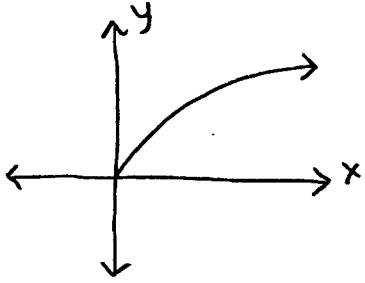
$y = x^2$



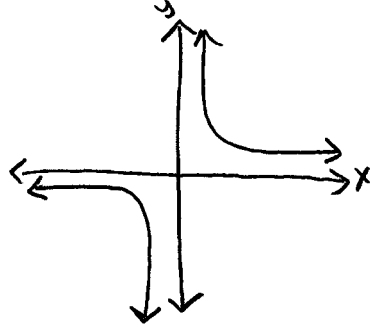
$y = x^3$



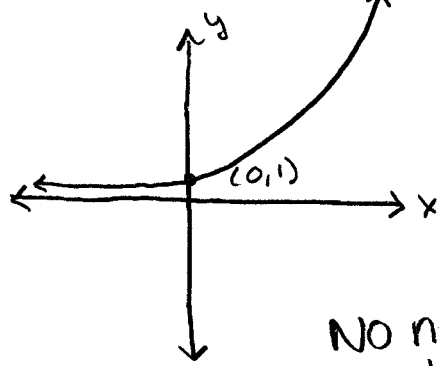
$$y = \sqrt{x}$$



$$y = \frac{1}{x}$$

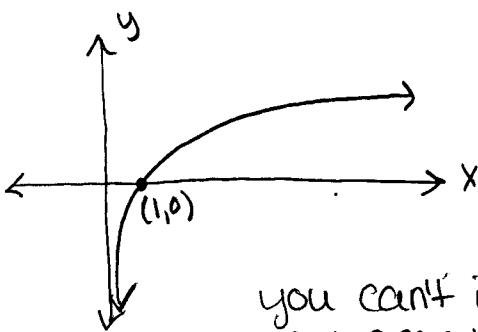


$$y = e^x$$



No negative outputs!

$$y = \ln x$$



you can't input any negative values!